

3-5

The Five Senses!

VISION HEARING SMELL TASTE TOUCH



LITERACY



Try writing a [5 Senses Poem!](#)

She Sells

She sells sea shells by the seashore
And the shells that she sells are sea shells
for sure.

If a Dog

If a dog chews shoes, whose shoes does he
choose?

[More → Terrific Tongue Twisters for Kids](#)

Power Vocabulary — The Five Senses —



- [Seven Day Magic – Chapter 3 – Part One](#)
- [Seven Day Magic – Chapter 3 – Part Two](#)
- [Book Fatima the Spinner and the Tent](#)
- [Rhymes/Oral Story/Thought Problem](#)

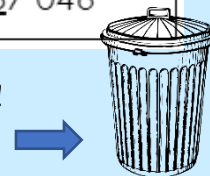
NUMERACY

Have some fun with another sense - number sense! ;)

- Pick at least one number in your list per day. If you need more numbers, roll dice or flip cards to create more numbers. For each number:
 - Read it to an adult. Remember...don't say the word "and" when reading large numbers.
 - Is it odd or even? How do you know?
 - What would be: 1 more/1 less? 100 more/100 less? 1000 more/1000 less?
 - What is the value of the underlined digit? Ex: $1\underline{6}406 = 6000$
 - Represent the number in expanded form. Ex: $431 = 400 + 30 + 1$

Grade 3	Grade 4	Grade 5
90 <u>8</u>	540 <u>1</u>	2 <u>1</u> 400
4 <u>5</u> 1	5 <u>3</u> 32	<u>7</u> 83 210
<u>2</u> 40	1 <u>0</u> 000	740 <u>4</u> 04
9 <u>9</u> 9	13 <u>7</u> 8	1 000 00 <u>0</u>
<u>6</u> 13	<u>8</u> 402	<u>8</u> 7 046

- Try the Garbage Pail game!



Week 6

May 11-15

- ✓ Try to **read** with a family member or on your own, for at least **30 minutes each day!**
- ✓ Spend **30 minutes** of your day being **physically active!**

- Estimate how many flying cars are in the cup using the clues provided. The answer will be revealed next week. Have each member of your family make an estimate based on the clues!

Clue #1
The answer is an even number that is less than 61.

Clue #2
The answer is a multiple of 3.

Clue #3
The answer is not a multiple of 5.

Clue #4
Cross out any number with a digit that matches the number of cars that are flying above the cup.

Clue #5
Cross out any numbers that include the digit represented by the die.

REMINDER!

Don't forget to enter for your chance to win a new bike! Information can be found on the school website! ☺

SCIENCE

MYSTERY science



Grades 3-5

Light, Eyes, & Vision

What do people who are blind see?

Human Machine

Human Body, Senses, & the Brain

3rd Grade, 4th Grade, 5th Grade

HOME SCIENCE TOOLS.
inspired learning

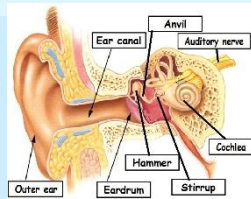
Try these five senses science experiments and you'll marvel at the work your organs do!

Brain Processing of Senses



Before Video

- What do animals need to do to survive?
- How do animals (including humans) use their senses to survive?
- How do organisms detect, process and use information about the environment?
- What is "reaction time" and how does it help an animal survive?
- What is an instinct?



Learn all about how your ears work!

ART

Synesthesia is when a person's brain makes their senses unite. Wow! What does that mean? The most common form is colored letters and numbers. So, someone might always see a certain color in response to a letter of the alphabet or a number. For example, they might see the word "plane" as mint green or the number "4" as dark brown.

Let's combine two of your senses this week!
SOUND AND SIGHT

Practice drawing to music. Choose an instrumental song that inspires you, and draw whatever comes to mind. (Shapes/lines/doodles – anything!)

Explore which colors and lines/forms you can associate with the song, and develop this into a color scheme and style. 😊

Found Sound Choice Board

WWW.CALDWELLORGANIZEDCHAOS.COM

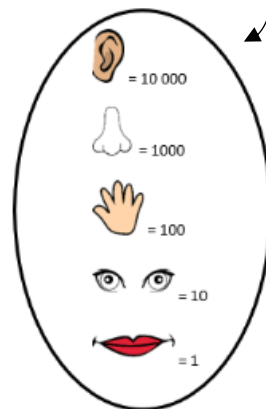
Find something from nature to make sounds with	Make music with (cleaned) trash	Find at least 3 different things that make sounds
Use 1 item to make 3 sounds	Make music by scraping things	Use your body to make sounds
Make music by shaking things	Find something in your house to make sounds with	Use items you find to make sounds like the beach

Growth Mindset



What Number Does Each Picture Represent?

Use this key



-
-
-

4. Draw your own picture with people or monsters, using the body parts. What is the value of your picture? Can you draw a picture that has a value of 33 333? Or 5555? Or 444? Share your pictures with your teacher!